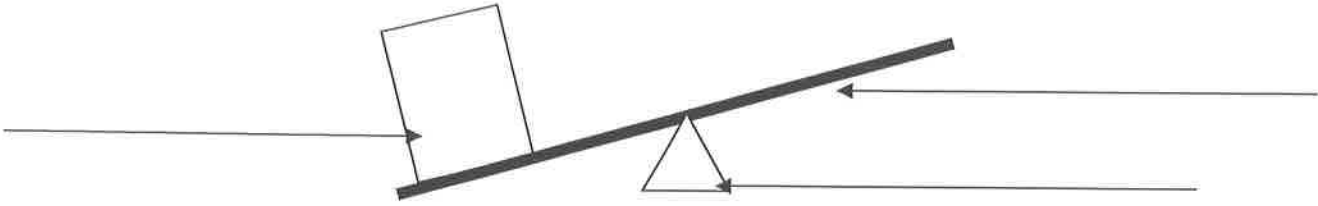


Name _____ # _____

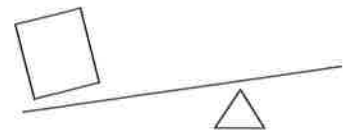
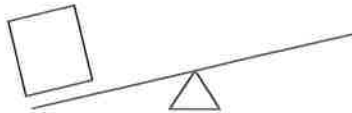
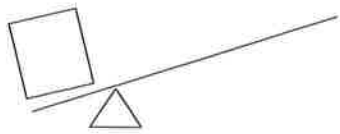
Levers Notes

1. Label the parts of the lever.



2. Draw or write examples of levers.

3. Which lever will make the job the easiest?



4. Why do people use levers? (restate the question and answer in a complete sentence)
