

More Fractions on Number Lines

Home Link 7-6

NAME _____


DATE _____

TIME _____

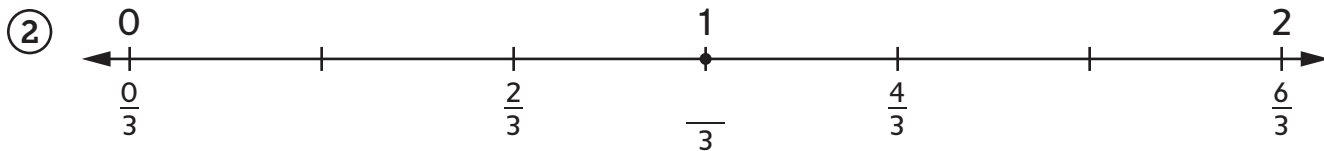
Family Note Today your child identified fractions that are less than or greater than 1 on number lines. Help your child count the number of equal parts or distances between 0 and 1 and label each tick mark with a fraction.

Please return this Home Link to school tomorrow.

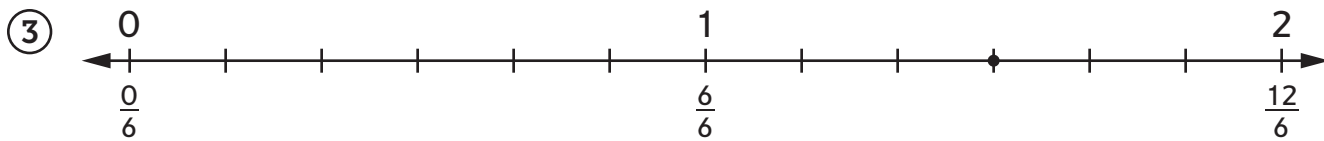
For each number line, fill in the missing numbers. Then name the fraction at each point.



_____ names the point on the number line.



_____ names the point on the number line.



_____ names the point on the number line.

④ Look at the point on each number line. Which point names a fraction greater than 1? _____

Practice

Fill in the unit. Solve. Show your work on the back of this page.

⑤ $549 - 289 =$ _____

⑥ $739 + 261 =$ _____

Unit