

Perimeter

Home Link 4-6

NAME _____

DATE _____

TIME _____

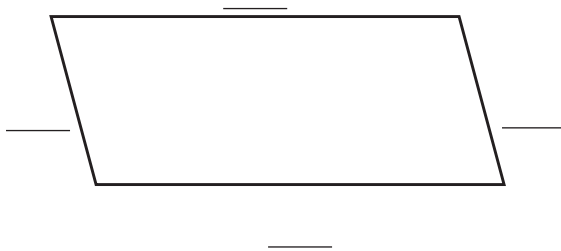
Family Note Today your child found the perimeters of several polygons. Perimeter is the distance around a 2-dimensional shape. Finding perimeters gives your child practice measuring to the nearest $\frac{1}{2}$ inch and the nearest whole centimeter.

Please return this Home Link to school tomorrow.

If you do not have a ruler at home, cut out and use the 6-inch ruler on the next page. Measure the sides of each polygon to the nearest $\frac{1}{2}$ inch. Use the side lengths to find the perimeter of each polygon. Write a number sentence to show how you found the perimeter.



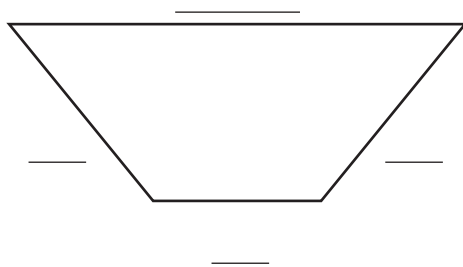
①



Number sentence: _____

Perimeter: about ____ inches

②



Number sentence: _____

Perimeter: about _____ inches

Perimeter (continued)

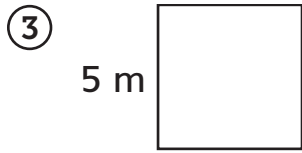
Home Link 4-6

NAME _____

DATE _____

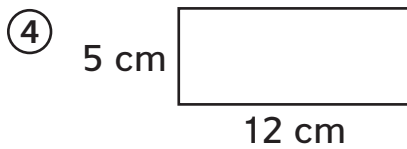
TIME _____

Find the perimeters of the square and the rectangle below.



Number sentence: _____

Perimeter: _____ meters (m)



Number sentence: _____

Perimeter: _____ centimeters (cm)

⑤ Draw a quadrilateral below. Find the perimeter to the nearest $\frac{1}{2}$ inch.

