

Representing Situations with Arrays

Home Link 2-7

NAME _____

DATE _____


TIME _____

Family Note Today your child practiced drawing arrays to represent number stories. Your child also played *Array Bingo* to practice multiplication facts with arrays and equal groups.


Please return this Home Link to school tomorrow.




- ① There are 12 trombone players in a parade.
 Show at least 3 different ways they can be arranged into arrays.
 Show your work on the dot grids below.
 Write a number model for each array.




Number model: _____



Number model: _____



Number model: _____



Number model: _____

- ② Can you make an array with 5 rows for the 12 players? Explain. _____
