

Telling Time

Home Link 1-3

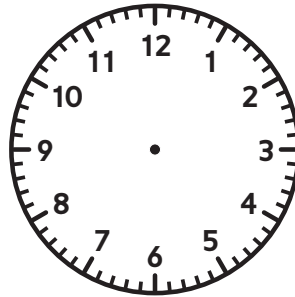
NAME _____

DATE _____

Family Note Today your child explored some of the math tools commonly used in third grade. We reviewed how to read a ruler to the nearest inch and centimeter, and how to tell time to the nearest hour, half hour, and 5 minutes. Help your child read each time by paying attention to the position of both the hour and the minute hands.

Please return this Home Link to school tomorrow.

- ① Draw the hour hand and the minute hand to show the time right now. Write the time.



_____ : _____


Write the time shown.

②




_____ : _____

③




_____ : _____

④




_____ : _____

⑤




_____ : _____

⑥



_____ : _____

⑦



_____ : _____

- ⑧ Show someone how you solved the hardest problem on this page.